


Maths Challenge



Maths Challenge




1. How many apples are there?



Maths Challenge



2. Below are the bedtimes of 3 friends. Who goes to bed the earliest?



Maths Challenge



3. Look at the following pattern:



What comes next?

- a.
- b.
- c.



Maths Challenge



4. The mouse is _____ the cheese.

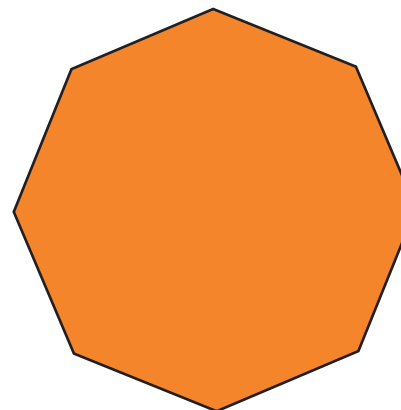
- a) beside b) behind c) inside



Maths Challenge



5. How many vertices does this shape have?



Maths Challenge



6. Can you work out:

$$30 + 40$$


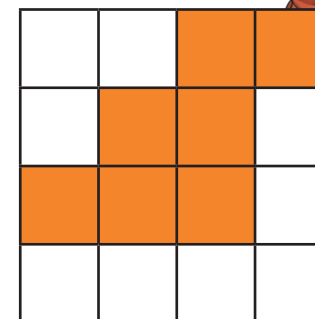
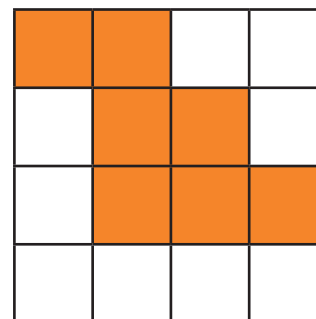


Maths Challenge



7. What has been done to this shape?

- a) flip b) slide c) turn



Maths Challenge



8. Toby went to see a film. It started at 2:00 and finished 2 and a half hours later. What time did it finish?



Maths Challenge



9. Find the answer to:

$$3 \div 3$$



Maths Challenge



10. On what day of the week is the 18th day of the month?


OCTOBER						
MON	TUE	WED	THU	FRI	SAT	SUN
		1	2	3	4	5
6	7	8	9	10	11	12
13	14	15	16	17	18	19
20	21	22	23	24	25	26
27	28	29	30			



Maths Challenge



11. Work out the following problem.



12. Divide the buns into each basket equally.
How many buns go in each basket?



Maths Challenge Cards **Answers**

1. **25 apples**
2. **John goes to bed the earliest. (John 7:15, Alice 7:45, Ruby 7:30)**
3. **c**
4. **a – beside**
5. **8 vertices**
6. **70**
7. **a – flip**
8. **c – the film finished at 4:30**
9. **1**
10. **Saturday**
11. **6**
12. **3 buns go in each basket**