

# Money


Name: \_\_\_\_\_

**1** How much money is there?



p

1 mark



p

1 mark

**2** Max and Kim have some money.



Max



Kim

Who has more money?

\_\_\_\_\_

1 mark

**3** Match the coins and notes to their values.



£10



£20



£5

1 mark

**4** Tick the coins that make 61p.



1 mark

**5** Mo needs £1 to buy a comic.

He has these coins.

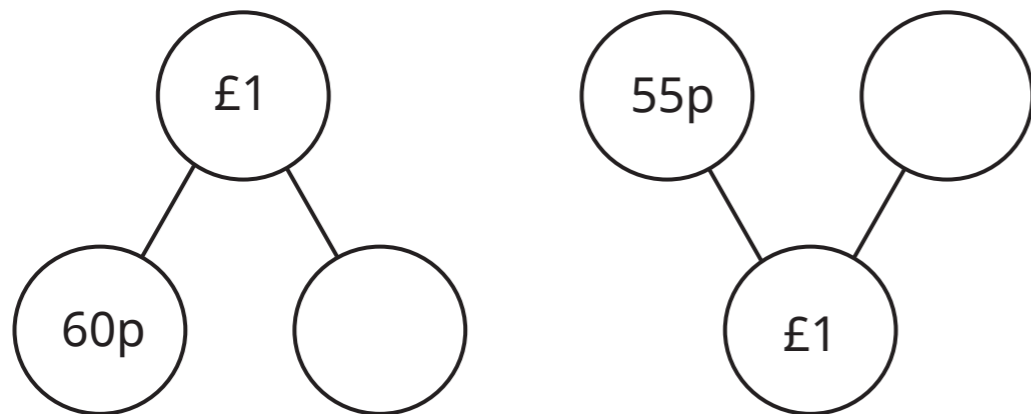


How much more money does Mo need?

p

1 mark

6 Complete the part-whole models.




2 marks

7 Sam has 80p.

Dan has 12p more than Sam.

Tick the coins that Dan has got.



1 mark

8 Ben has 4 different coins in his money box.

He has less than 60p.

Tick the coins that Ben could have.



1 mark

9 Jo and Ron are buying fruit.

Here is a price list.

Fruit	Price
banana	65p
apple	75p
orange	35p
pear	45p

Jo buys 2 pieces of fruit.

She spends exactly £1

Which pieces of fruit does Jo buy?

\_\_\_\_\_ and \_\_\_\_\_



1 mark

Ron buys 2 oranges.

He pays with a £1 coin.

How much change does Ron get?

p



1 mark