

10 More, 10 Less



Write the correct numbers to complete the table.

10 Less	Number	10 More

Complete the number sequences.

34	44	54			
89	79	69			
			43	33	23

Can you create your own number sequence by counting on or back in steps of 10?



10 More, 10 Less



Write the correct numbers to complete the table.

10 Less	Number	10 More

Complete the number sequences.

34	44	54			
89	79	69			
			43	33	23


Can you create your own number sequence by counting on or back in steps of 10?



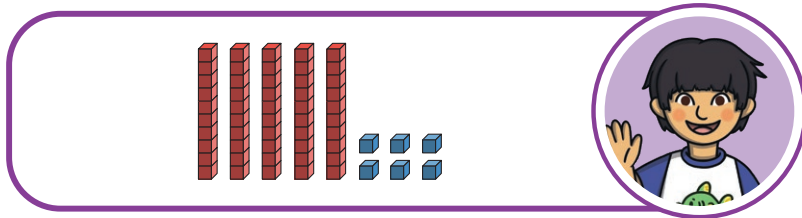
10 More, 10 Less



Seren has this number.



Matt has this number.



Seren gives 1 ten to Matt.



Matt's number is greater than mine now.


Is Seren correct?
Explain your reasoning.



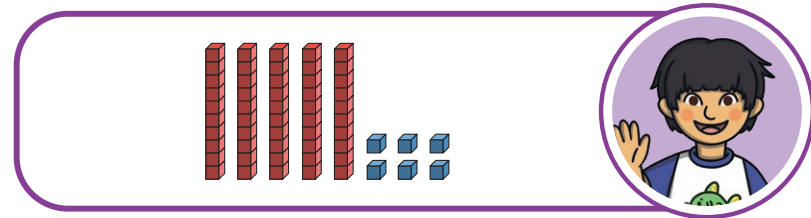
10 More, 10 Less



Seren has this number.



Matt has this number.



Seren gives 1 ten to Matt.



Matt's number is greater than mine now.

Is Seren correct?
Explain your reasoning.



10 More, 10 Less



Which house does each child live at?



6



16



26



36



46

My house number is 10 more than Ned's house number.



Hanna

My house number is 10 less than Ned's house number.



Sol

My house number has 6 ones.



Seren

My house number is 10 more than 16.



Ned

My house number is the smallest number.



Kit



10 More, 10 Less



Which house does each child live at?



6



16



26



36



46

My house number is 10 more than Ned's house number.



Hanna

My house number is 10 less than Ned's house number.



Sol

My house number has 6 ones.



Seren

My house number is 10 more than 16.



Ned

My house number is the smallest number.



Kit

